

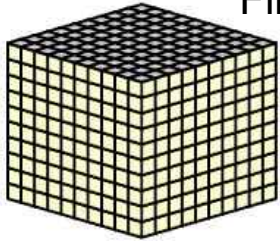
Name : _____

Score : _____


Teacher : _____

Date : _____


Find the value of each group of base ten blocks.



= 1000



= 100

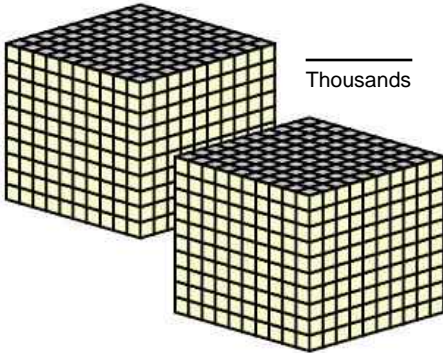


= 10




= 1

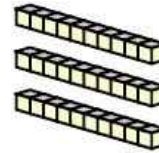
1)



_____ Thousands



_____ Hundreds



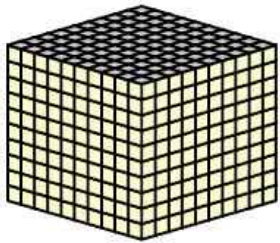
_____ Tens




_____ Ones

_____ Total

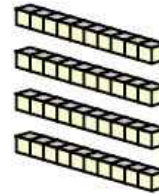
2)



_____ Thousands



_____ Hundreds



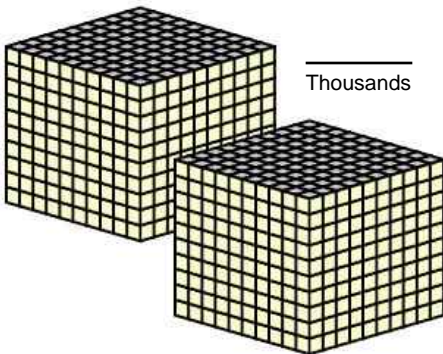
_____ Tens




_____ Ones

_____ Total


3)



_____ Thousands



_____ Hundreds



_____ Tens



_____ Ones

_____ Total



Name : _____

Score : _____

Teacher : _____

Date : _____

Find the value of each group of base ten blocks.

1) 2134

2) 1645

3) 2919

